





Ime in priimek:

Število točk:



Nadaljuj z zapisom. Piši na črte, ki jih imajo živali na telesu.





Izračunaj. Nato pobarvaj polja s pravilnimi rezultati.

$36 - 5 = \underline{\quad}$

$57 + 3 = \underline{\quad}$

$69 - 5 = \underline{\quad}$

$58 + 1 = \underline{\quad}$

$9 + 7 = \underline{\quad}$

$62 - 1 = \underline{\quad}$

$49 - 6 = \underline{\quad}$

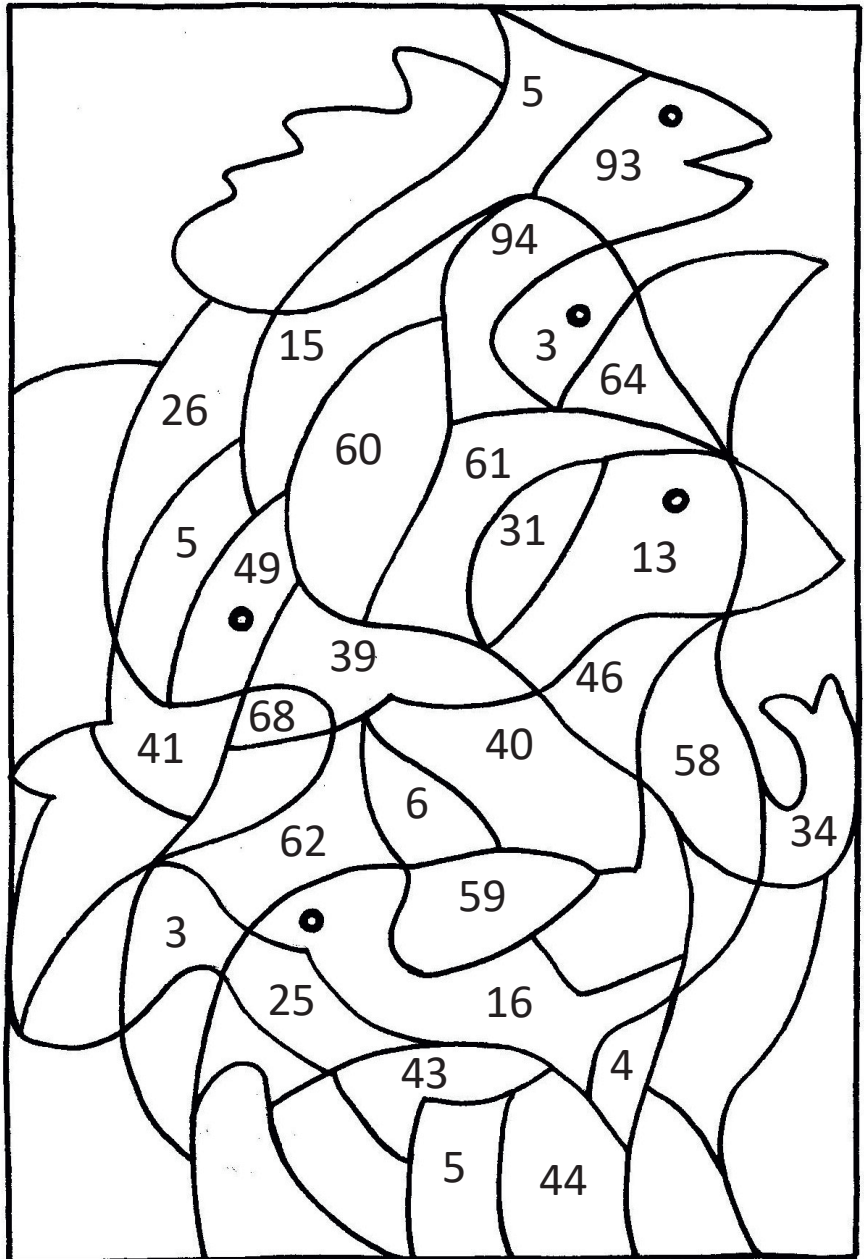
$12 - 8 = \underline{\quad}$

$32 + 7 = \underline{\quad}$

$46 + 3 = \underline{\quad}$

$28 - 3 = \underline{\quad}$

$62 + 6 = \underline{\quad}$



Dobil/a sem: \_\_\_\_\_













Reši račune. Poveži kužka s kostjo. Vsak kuža dobi samo eno kost.  
Obkroži tiste kužke, ki niso dobili kosti.

$$70 - \square = 65$$

$$49 - \square = 41$$

$$63 + \square = 69$$

$$\square + 48 = 50$$



$$20 - \square = 19$$

$$16 + \square = 19$$

$$52 + \square = 59$$

$$\square + 35 = 39$$





Reši naloge.

A Papagaj Aron je najprej znal 5 besed, ki jih je neprestano ponavljal. Nejc ga je naučil še 7 besed. Koliko besed je na koncu znal Aron?

Račun: \_\_\_\_\_

Odgovor: \_\_\_\_\_




B Muc Alf je na vrtu ujel 6 miši. Muca Neca je ujela 2 miški več. Koliko mišk je ujela Neca? Koliko miši sta ujela Alf in Neca skupaj?

Račun: \_\_\_\_\_

Račun: \_\_\_\_\_

Odgovor: Muca Neca \_\_\_\_\_

Odgovor: Skupaj \_\_\_\_\_



C Reks ima zelo rad pasje piškote. Manca je kupila škatlo piškotov. V škatli je bilo 38 piškotov. Reks je prvi dan pojedel 6 piškotov. Koliko piškotov mu je ostalo?

Račun: \_\_\_\_\_

Odgovor: \_\_\_\_\_

